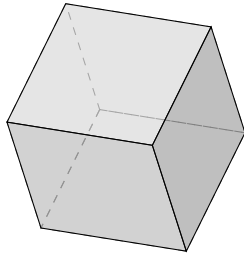
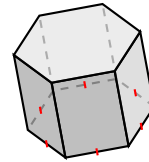


# Clasificar Figuras (A)

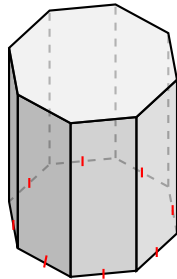
Identifique cada figura.



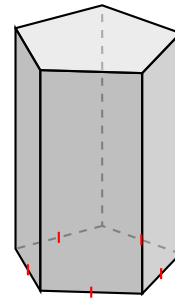
---



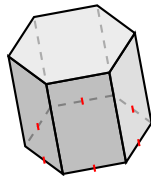
---



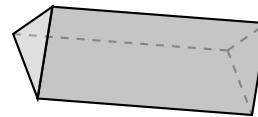
---



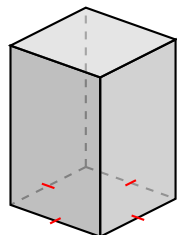
---



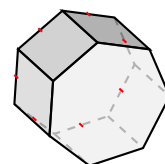
---



---



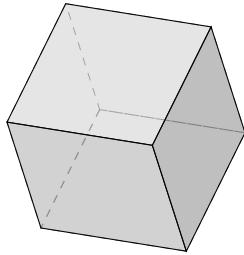
---



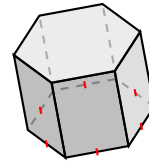
---

# Clasificar Figuras (A) Respuestas

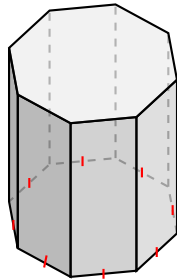
Identifique cada figura.



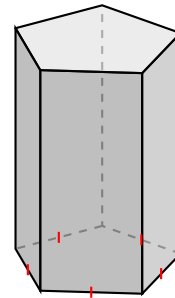
prisma cuadrado, cubo



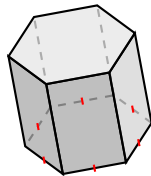
prisma hexagonal



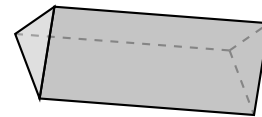
prisma octagonal



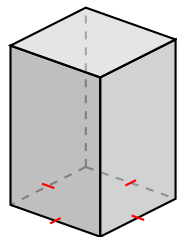
prisma pentagonal



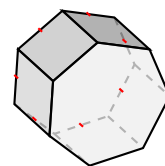
prisma hexagonal



prisma triangular



prisma cuadrado



prisma heptagonal