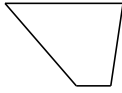
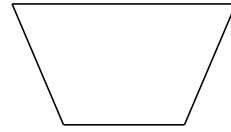


Clasificar Cuadriláteros (J)

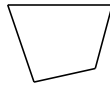
Identifique cada cuadrilátero.

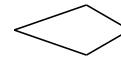















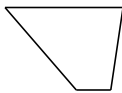




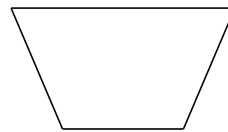


Clasificar Cuadriláteros (J) Respuesta

Identifique cada cuadrilátero.



trapezio



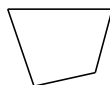
trapezio isósceles



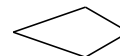
cuadrado




paralelogramo




cuadrilátero irregular



deltoide



paralelogramo



rectángulo



cuadrilátero cóncavo



trapezio rectángulo