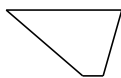
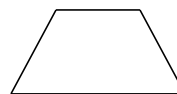


# Clasificar Cuadriláteros (H)


Identifique cada cuadrilátero.



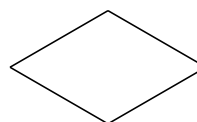
\_\_\_\_\_



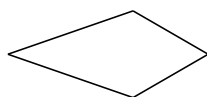
\_\_\_\_\_



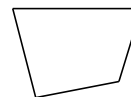
\_\_\_\_\_



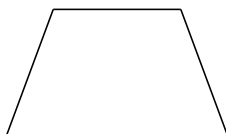
\_\_\_\_\_



\_\_\_\_\_



\_\_\_\_\_



\_\_\_\_\_



\_\_\_\_\_



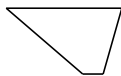
\_\_\_\_\_



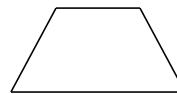
\_\_\_\_\_

# Clasificar Cuadriláteros (H) Respuesta


Identifique cada cuadrilátero.



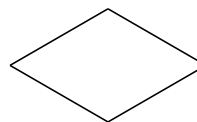
trapezio



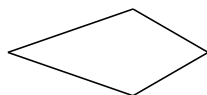
trapezio isósceles



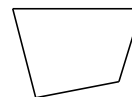
cuadrado



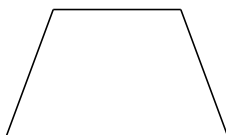
rombo



deltoide



cuadrilátero irregular



trapezio isósceles



paralelogramo



rectángulo



trapezio rectángulo