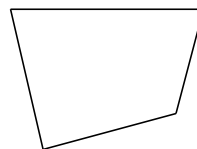


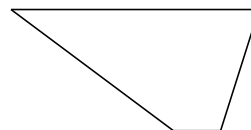
Clasificar Cuadriláteros (G)

Identifique cada cuadrilátero.






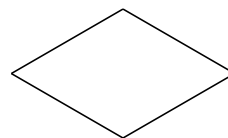















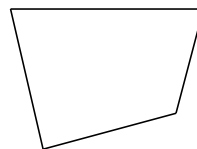


Clasificar Cuadriláteros (G) Respuesta

Identifique cada cuadrilátero.



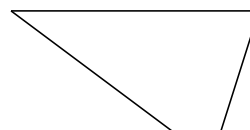
cuadrilátero cóncavo



cuadrilátero irregular




deltoide



trapecio



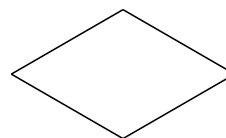
cuadrado



rectángulo



trapecio isósceles



rombo



trapecio rectángulo



trapecio rectángulo