
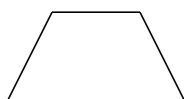


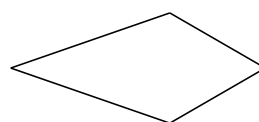
Clasificar Cuadriláteros (F)

Identifique cada cuadrilátero.























Clasificar Cuadriláteros (F) Respuesta

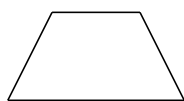
Identifique cada cuadrilátero.



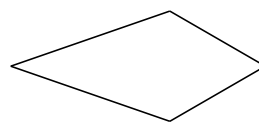
cuadrilátero irregular



rectángulo




trapecio isósceles



deltoide




cuadrilátero cóncavo



paralelogramo



rectángulo



cuadrado



trapecio



rombo