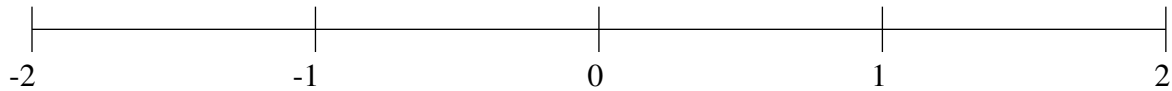


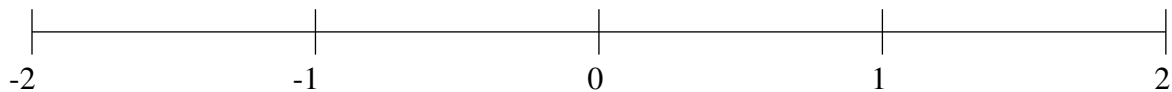
Ordenar Fracciones (J)

Ordene cada conjunto de fracciones usando la recta numérica.

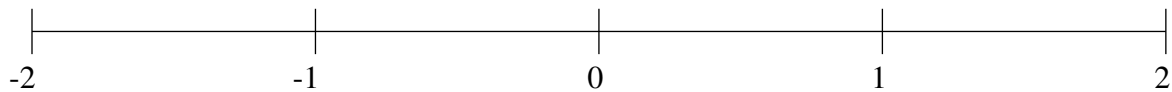
$$-1\frac{1}{2}, 1\frac{3}{4}, -1\frac{24}{25}, -\frac{1}{4}, -1\frac{3}{4}, -\frac{9}{10}, \frac{3}{5}, 1\frac{3}{25}$$



$$\frac{1}{2}, -1\frac{4}{5}, \frac{1}{4}, -1\frac{3}{10}, 1\frac{1}{4}, -\frac{9}{10}, 1\frac{9}{10}, -\frac{1}{2}$$



$$\frac{1}{5}, -\frac{1}{5}, -\frac{1}{2}, -1\frac{1}{5}, 1\frac{2}{5}, 1\frac{3}{4}, \frac{3}{5}, -1\frac{3}{5}$$

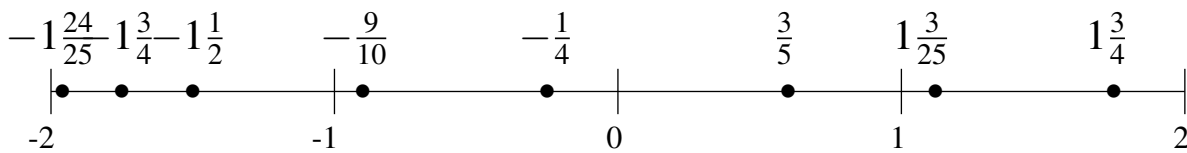


Ordenar Fracciones (J) Respuestas

Ordene cada conjunto de fracciones usando la recta numérica.

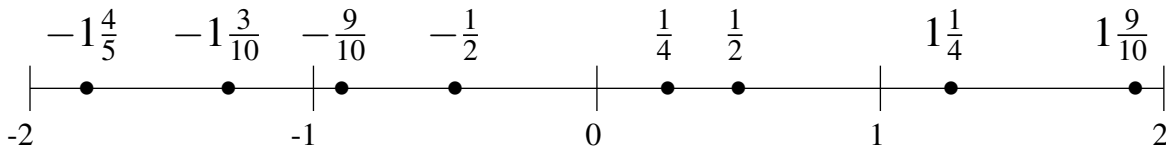
$$-1\frac{1}{2}, 1\frac{3}{4}, -1\frac{24}{25}, -\frac{1}{4}, -1\frac{3}{4}, -\frac{9}{10}, \frac{3}{5}, 1\frac{3}{25}$$

$$-1\frac{24}{25}, -1\frac{3}{4}, -1\frac{1}{2}, -\frac{9}{10}, -\frac{1}{4}, \frac{3}{5}, 1\frac{3}{25}, 1\frac{3}{4}$$



$$\frac{1}{2}, -1\frac{4}{5}, \frac{1}{4}, -1\frac{3}{10}, 1\frac{1}{4}, -\frac{9}{10}, 1\frac{9}{10}, -\frac{1}{2}$$

$$-1\frac{4}{5}, -1\frac{3}{10}, -\frac{9}{10}, -\frac{1}{2}, \frac{1}{4}, \frac{1}{2}, 1\frac{1}{4}, 1\frac{9}{10}$$



$$\frac{1}{5}, -\frac{1}{5}, -\frac{1}{2}, -1\frac{1}{5}, 1\frac{2}{5}, 1\frac{3}{4}, \frac{3}{5}, -1\frac{3}{5}$$

$$-1\frac{3}{5}, -1\frac{1}{5}, -\frac{1}{2}, -\frac{1}{5}, \frac{1}{5}, \frac{3}{5}, 1\frac{2}{5}, 1\frac{3}{4}$$

