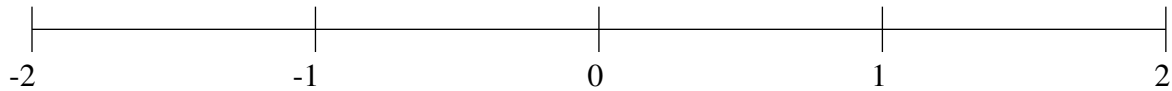


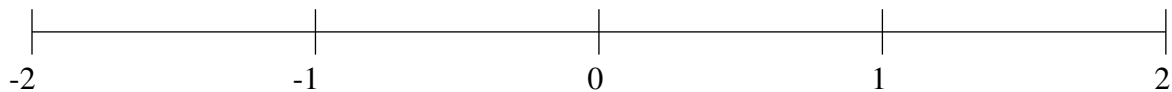
## Ordenar Fracciones (D)

Ordene cada conjunto de fracciones usando la recta numérica.

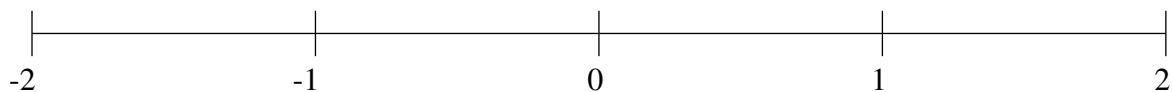
$$\frac{29}{50}, -\frac{1}{25}, -1\frac{1}{2}, -\frac{1}{4}, 1\frac{4}{5}, -1\frac{4}{5}, 1\frac{1}{5}, -\frac{1}{2}$$



$$-\frac{1}{2}, -\frac{4}{5}, -1\frac{3}{4}, \frac{13}{20}, 1\frac{3}{4}, -1\frac{1}{5}, \frac{2}{5}, -1\frac{1}{2}$$



$$1\frac{3}{4}, -1\frac{3}{4}, \frac{18}{25}, -\frac{3}{5}, \frac{1}{5}, 1\frac{2}{5}, -\frac{1}{5}, -1\frac{1}{4}$$

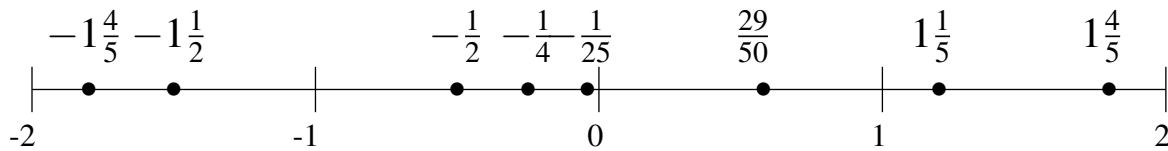


## Ordenar Fracciones (D) Respuestas

Ordene cada conjunto de fracciones usando la recta numérica.

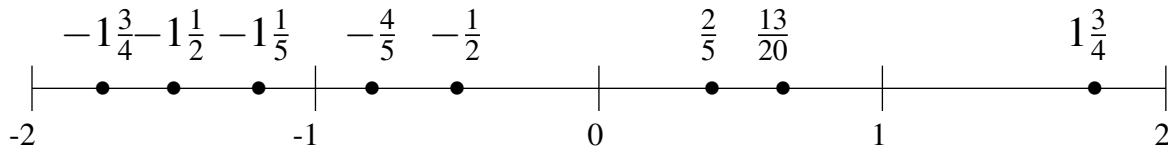
$$\frac{29}{50}, -\frac{1}{25}, -1\frac{1}{2}, -\frac{1}{4}, 1\frac{4}{5}, -1\frac{4}{5}, 1\frac{1}{5}, -\frac{1}{2}$$

$$-1\frac{4}{5}, -1\frac{1}{2}, -\frac{1}{2}, -\frac{1}{4}, -\frac{1}{25}, \frac{29}{50}, 1\frac{1}{5}, 1\frac{4}{5}$$



$$-\frac{1}{2}, -\frac{4}{5}, -1\frac{3}{4}, \frac{13}{20}, 1\frac{3}{4}, -1\frac{1}{5}, \frac{2}{5}, -1\frac{1}{2}$$

$$-1\frac{3}{4}, -1\frac{1}{2}, -1\frac{1}{5}, -\frac{4}{5}, -\frac{1}{2}, \frac{2}{5}, \frac{13}{20}, 1\frac{3}{4}$$



$$1\frac{3}{4}, -1\frac{3}{4}, \frac{18}{25}, -\frac{3}{5}, \frac{1}{5}, 1\frac{2}{5}, -\frac{1}{5}, -1\frac{1}{4}$$

$$-1\frac{3}{4}, -1\frac{1}{4}, -\frac{3}{5}, -\frac{1}{5}, \frac{1}{5}, \frac{18}{25}, 1\frac{2}{5}, 1\frac{3}{4}$$

