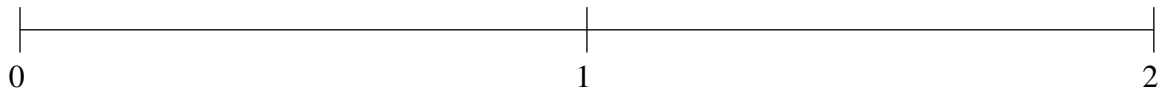


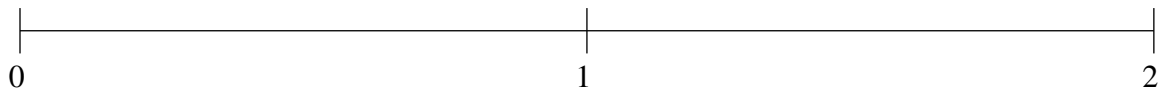
Ordenar Fracciones (A)

Ordene cada conjunto de fracciones usando la recta numérica.

$$\frac{1}{2}, 1\frac{1}{4}, 1\frac{2}{59}, \frac{9}{11}, \frac{1}{10}$$



$$\frac{11}{12}, 1\frac{18}{49}, \frac{16}{31}, 1\frac{38}{39}, \frac{1}{4}$$



$$\frac{37}{49}, \frac{1}{3}, \frac{5}{51}, 1\frac{18}{29}, 1\frac{1}{32}$$

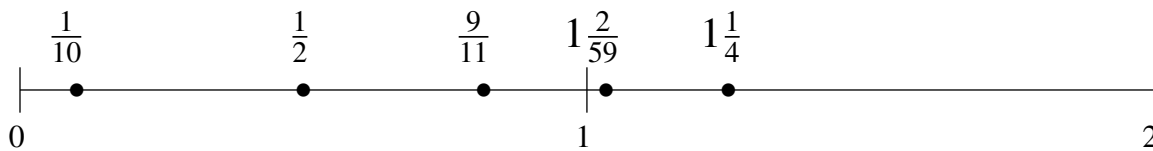


Ordenar Fracciones (A) Respuestas

Ordene cada conjunto de fracciones usando la recta numérica.

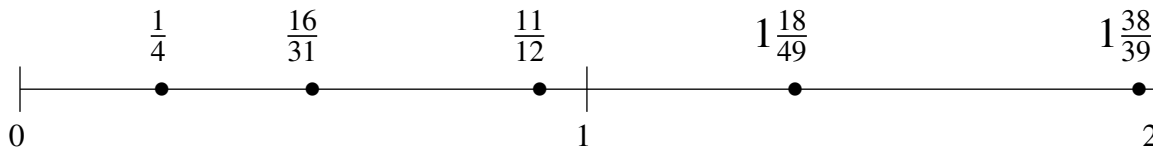
$$\frac{1}{2}, 1\frac{1}{4}, 1\frac{2}{59}, \frac{9}{11}, \frac{1}{10}$$

$$\frac{1}{10}, \frac{1}{2}, \frac{9}{11}, 1\frac{2}{59}, 1\frac{1}{4}$$



$$\frac{11}{12}, 1\frac{18}{49}, \frac{16}{31}, 1\frac{38}{39}, \frac{1}{4}$$

$$\frac{1}{4}, \frac{16}{31}, \frac{11}{12}, 1\frac{18}{49}, 1\frac{38}{39}$$



$$\frac{37}{49}, \frac{1}{3}, \frac{5}{51}, 1\frac{18}{29}, 1\frac{1}{32}$$

$$\frac{5}{51}, \frac{1}{3}, \frac{37}{49}, 1\frac{1}{32}, 1\frac{18}{29}$$

