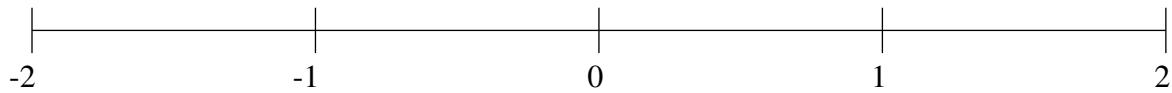


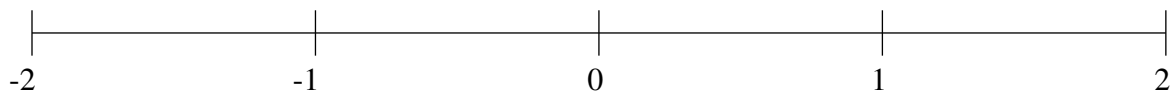
Ordenar Fracciones (A)

Ordene cada conjunto de fracciones usando la recta numérica.

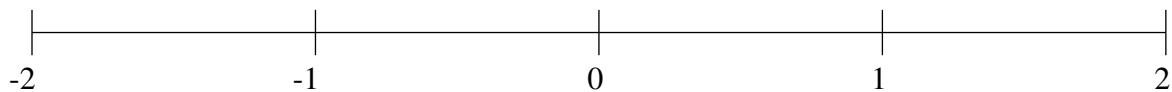
$$-1\frac{1}{3}, -1\frac{9}{10}, -\frac{1}{2}, -1\frac{2}{3}, -\frac{1}{8}, 1\frac{6}{7}, \frac{1}{2}, 1\frac{3}{8}$$



$$-1\frac{2}{3}, 1\frac{1}{4}, 1\frac{9}{13}, -\frac{2}{7}, -\frac{1}{2}, -1\frac{2}{11}, \frac{11}{14}, -\frac{5}{7}$$



$$-\frac{1}{6}, \frac{4}{7}, \frac{9}{11}, -1\frac{3}{23}, 1\frac{1}{23}, -\frac{1}{2}, -\frac{6}{7}, -1\frac{2}{3}$$

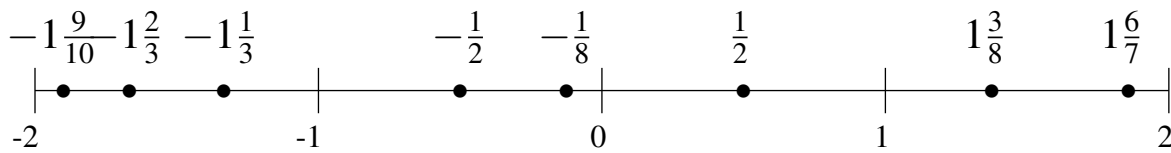


Ordenar Fracciones (A) Respuestas

Ordene cada conjunto de fracciones usando la recta numérica.

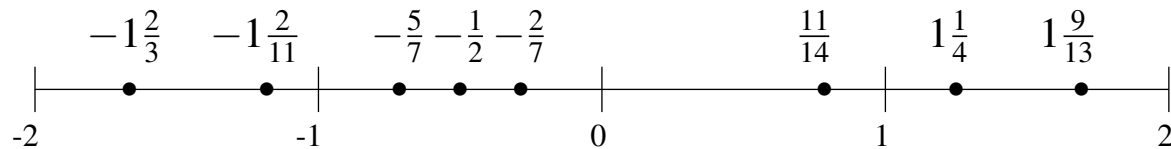
$$-1\frac{1}{3}, -1\frac{9}{10}, -\frac{1}{2}, -1\frac{2}{3}, -\frac{1}{8}, 1\frac{6}{7}, \frac{1}{2}, 1\frac{3}{8}$$

$$-1\frac{9}{10}, -1\frac{2}{3}, -1\frac{1}{3}, -\frac{1}{2}, -\frac{1}{8}, \frac{1}{2}, 1\frac{3}{8}, 1\frac{6}{7}$$



$$-1\frac{2}{3}, 1\frac{1}{4}, 1\frac{9}{13}, -\frac{2}{7}, -\frac{1}{2}, -1\frac{2}{11}, \frac{11}{14}, -\frac{5}{7}$$

$$-1\frac{2}{3}, -1\frac{2}{11}, -\frac{5}{7}, -\frac{1}{2}, -\frac{2}{7}, \frac{11}{14}, 1\frac{1}{4}, 1\frac{9}{13}$$



$$-\frac{1}{6}, \frac{4}{7}, \frac{9}{11}, -1\frac{3}{23}, 1\frac{1}{23}, -\frac{1}{2}, -\frac{6}{7}, -1\frac{2}{3}$$

$$-1\frac{2}{3}, -1\frac{3}{23}, -\frac{6}{7}, -\frac{1}{2}, -\frac{1}{6}, \frac{4}{7}, \frac{9}{11}, 1\frac{1}{23}$$

