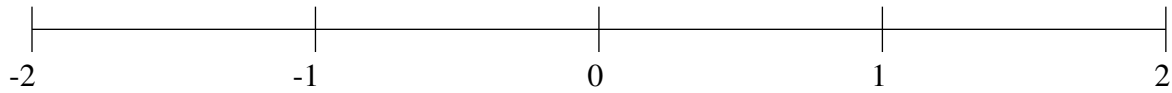


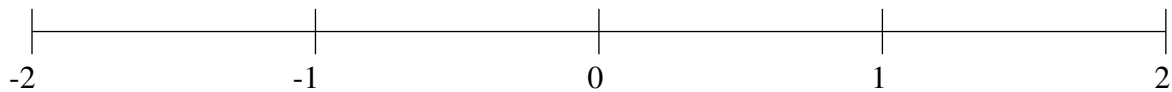
Ordenar Fracciones (A)

Ordene cada conjunto de fracciones usando la recta numérica.

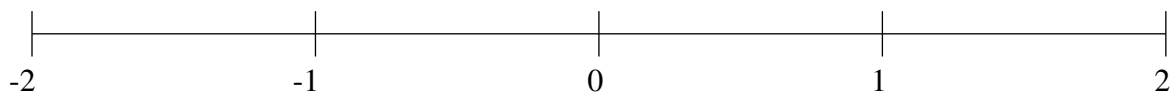
$$\frac{1}{8}, \frac{2}{3}, 1\frac{1}{2}, 1\frac{3}{4}, -1\frac{1}{4}, 1\frac{1}{12}, -1\frac{3}{4}, -\frac{2}{3}$$



$$-1\frac{2}{3}, -1\frac{1}{8}, -\frac{1}{4}, -\frac{1}{2}, 1\frac{1}{3}, \frac{1}{2}, 1\frac{2}{3}, \frac{3}{4}$$



$$-\frac{5}{6}, \frac{1}{2}, 1\frac{2}{3}, -1\frac{1}{4}, \frac{1}{4}, -1\frac{1}{2}, -\frac{1}{2}, -1\frac{3}{4}$$

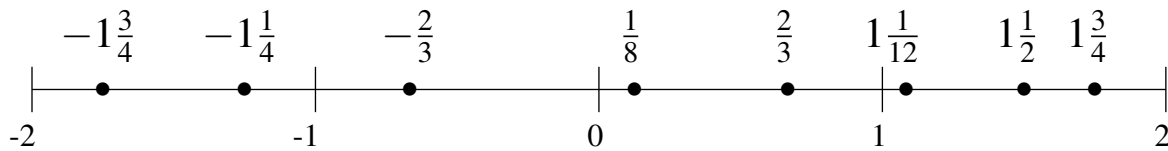


Ordenar Fracciones (A) Respuestas

Ordene cada conjunto de fracciones usando la recta numérica.

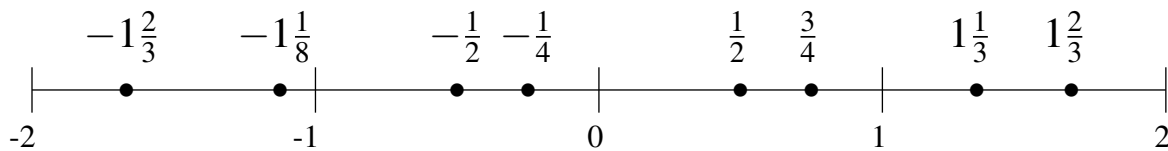
$$\frac{1}{8}, \frac{2}{3}, 1\frac{1}{2}, 1\frac{3}{4}, -1\frac{1}{4}, 1\frac{1}{12}, -1\frac{3}{4}, -\frac{2}{3}$$

$$-1\frac{3}{4}, -1\frac{1}{4}, -\frac{2}{3}, \frac{1}{8}, \frac{2}{3}, 1\frac{1}{12}, 1\frac{1}{2}, 1\frac{3}{4}$$



$$-1\frac{2}{3}, -1\frac{1}{8}, -\frac{1}{4}, -\frac{1}{2}, 1\frac{1}{3}, \frac{1}{2}, 1\frac{2}{3}, \frac{3}{4}$$

$$-1\frac{2}{3}, -1\frac{1}{8}, -\frac{1}{2}, -\frac{1}{4}, \frac{1}{2}, \frac{3}{4}, 1\frac{1}{3}, 1\frac{2}{3}$$



$$-\frac{5}{6}, \frac{1}{2}, 1\frac{2}{3}, -1\frac{1}{4}, \frac{1}{4}, -1\frac{1}{2}, -\frac{1}{2}, -1\frac{3}{4}$$

$$-1\frac{3}{4}, -1\frac{1}{2}, -1\frac{1}{4}, -\frac{5}{6}, -\frac{1}{2}, \frac{1}{4}, \frac{1}{2}, 1\frac{2}{3}$$

