

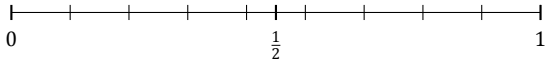
Redondear Fracciones (J)

Nombre: _____

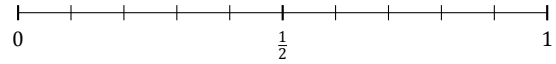
Fecha: _____

Redondee cada fracción hasta la mitad más cercana. Redondee por exceso.

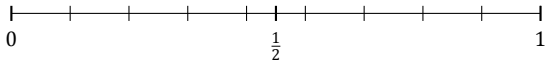
1. $\frac{7}{9} \approx$



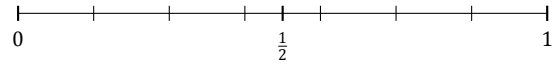
2. $\frac{5}{10} \approx$



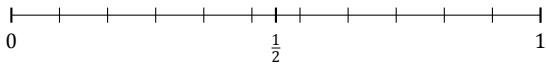
3. $\frac{1}{9} \approx$



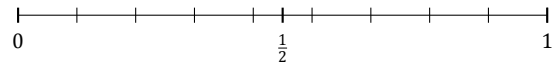
4. $\frac{3}{7} \approx$



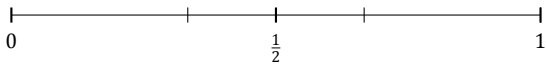
5. $\frac{8}{11} \approx$



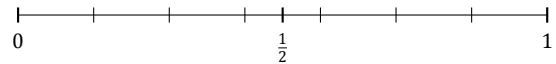
6. $\frac{8}{9} \approx$



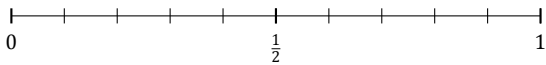
7. $\frac{2}{3} \approx$



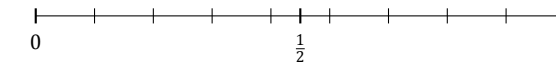
8. $\frac{2}{7} \approx$



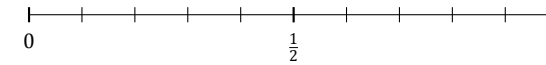
9. $\frac{8}{10} \approx$



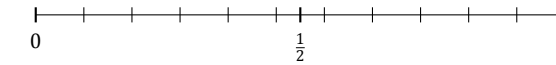
10. $\frac{4}{9} \approx$



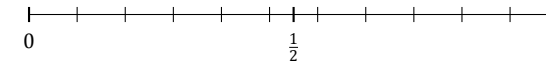
11. $\frac{2}{10} \approx$



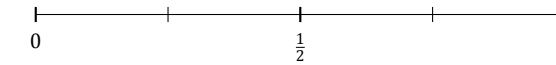
12. $\frac{5}{11} \approx$



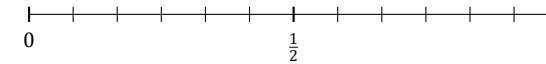
13. $\frac{6}{11} \approx$



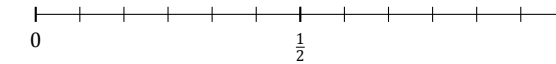
14. $\frac{3}{4} \approx$



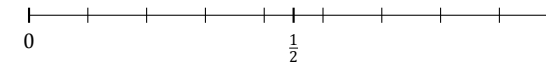
15. $\frac{10}{12} \approx$



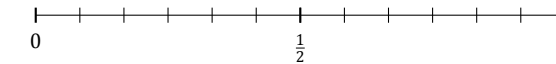
16. $\frac{2}{12} \approx$



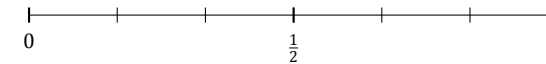
17. $\frac{2}{9} \approx$



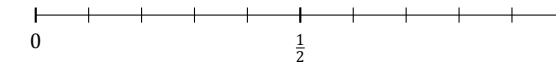
18. $\frac{3}{12} \approx$



19. $\frac{3}{6} \approx$



20. $\frac{1}{10} \approx$



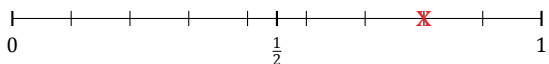
Redondear Fracciones (J) Respuestas

Nombre: _____

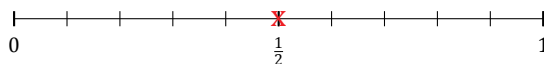
Fecha: _____

Redondee cada fracción hasta la mitad más cercana. Redondee por exceso.

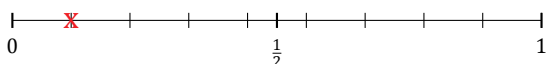
1. $\frac{7}{9} \approx 1$



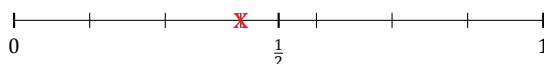
2. $\frac{5}{10} \approx \frac{1}{2}$



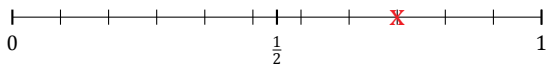
3. $\frac{1}{9} \approx 0$



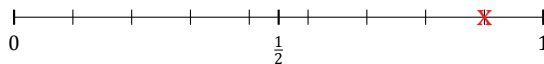
4. $\frac{3}{7} \approx \frac{1}{2}$



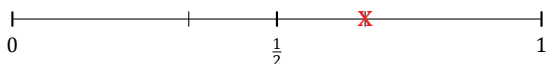
5. $\frac{8}{11} \approx \frac{1}{2}$



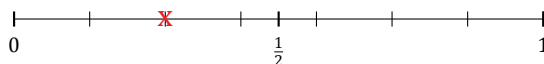
6. $\frac{8}{9} \approx 1$



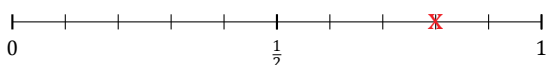
7. $\frac{2}{3} \approx \frac{1}{2}$



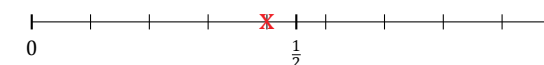
8. $\frac{2}{7} \approx \frac{1}{2}$



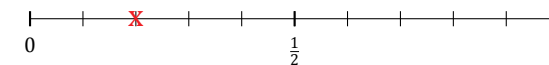
9. $\frac{8}{10} \approx 1$



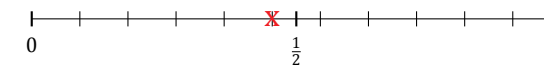
10. $\frac{4}{9} \approx \frac{1}{2}$



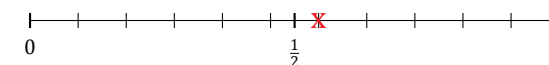
11. $\frac{2}{10} \approx 0$



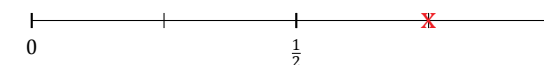
12. $\frac{5}{11} \approx \frac{1}{2}$



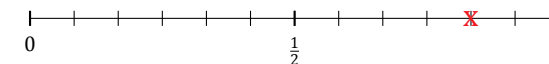
13. $\frac{6}{11} \approx \frac{1}{2}$



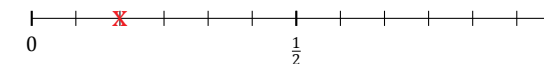
14. $\frac{3}{4} \approx 1$



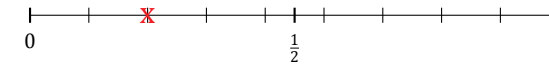
15. $\frac{10}{12} \approx 1$



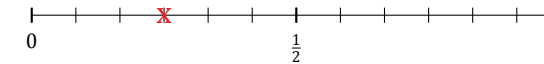
16. $\frac{2}{12} \approx 0$



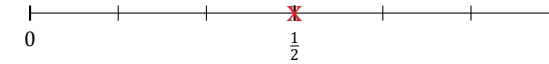
17. $\frac{2}{9} \approx 0$



18. $\frac{3}{12} \approx \frac{1}{2}$



19. $\frac{3}{6} \approx \frac{1}{2}$



20. $\frac{1}{10} \approx 0$

