

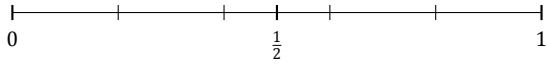
Redondear Fracciones (A)

Nombre: _____

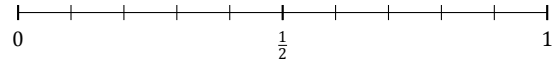
Fecha: _____

Redondee cada fracción hasta la mitad más cercana. Redondee por exceso.

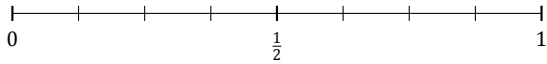
1. $\frac{1}{5} \approx$



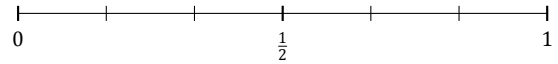
2. $\frac{7}{10} \approx$



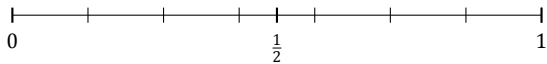
3. $\frac{6}{8} \approx$



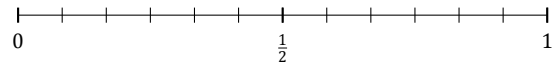
4. $\frac{1}{6} \approx$



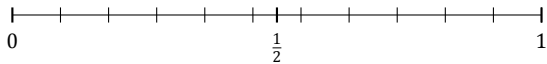
5. $\frac{4}{7} \approx$



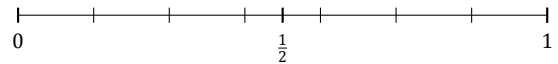
6. $\frac{7}{12} \approx$



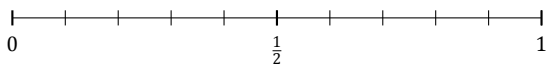
7. $\frac{8}{11} \approx$



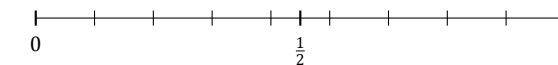
8. $\frac{5}{7} \approx$



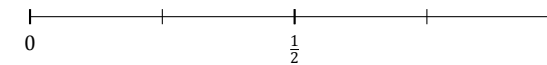
9. $\frac{9}{10} \approx$



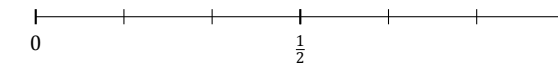
10. $\frac{5}{9} \approx$



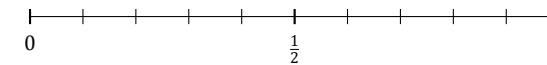
11. $\frac{2}{4} \approx$



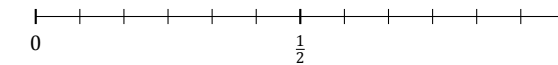
12. $\frac{2}{6} \approx$



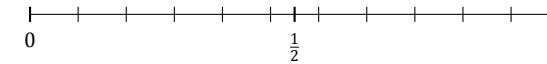
13. $\frac{4}{10} \approx$



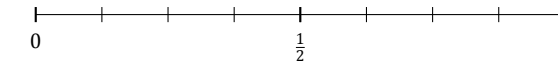
14. $\frac{8}{12} \approx$



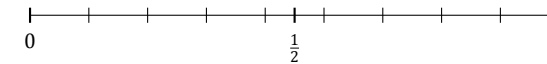
15. $\frac{6}{11} \approx$



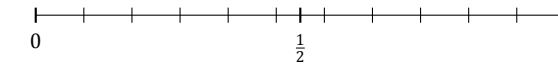
16. $\frac{5}{8} \approx$



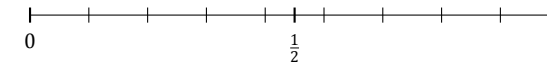
17. $\frac{1}{9} \approx$



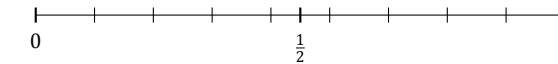
18. $\frac{9}{11} \approx$



19. $\frac{4}{9} \approx$



20. $\frac{2}{9} \approx$



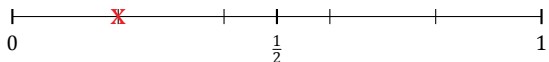
Redondear Fracciones (A) Respuestas

Nombre: _____

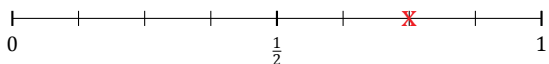
Fecha: _____

Redondee cada fracción hasta la mitad más cercana. Redondee por exceso.

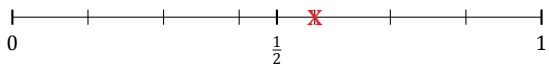
1. $\frac{1}{5} \approx 0$



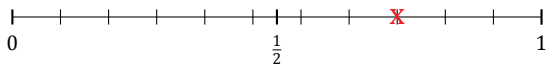
3. $\frac{6}{8} \approx 1$



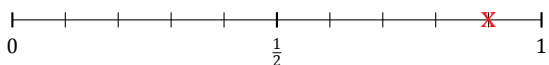
5. $\frac{4}{7} \approx \frac{1}{2}$



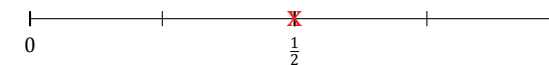
7. $\frac{8}{11} \approx \frac{1}{2}$



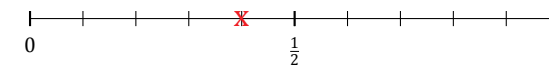
9. $\frac{9}{10} \approx 1$



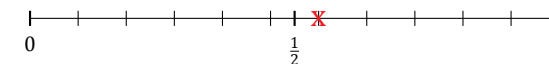
11. $\frac{2}{4} \approx \frac{1}{2}$



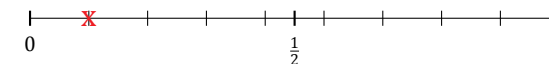
13. $\frac{4}{10} \approx \frac{1}{2}$



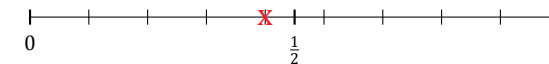
15. $\frac{6}{11} \approx \frac{1}{2}$



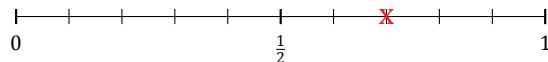
17. $\frac{1}{9} \approx 0$



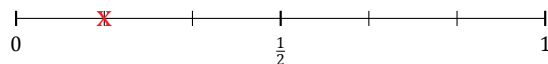
19. $\frac{4}{9} \approx \frac{1}{2}$



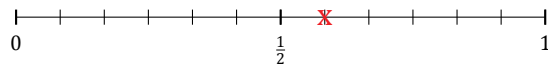
2. $\frac{7}{10} \approx \frac{1}{2}$



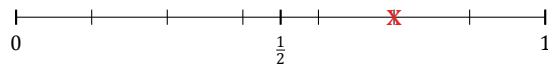
4. $\frac{1}{6} \approx 0$



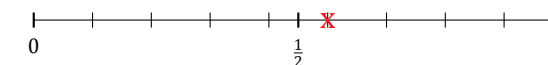
6. $\frac{7}{12} \approx \frac{1}{2}$



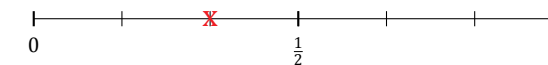
8. $\frac{5}{7} \approx \frac{1}{2}$



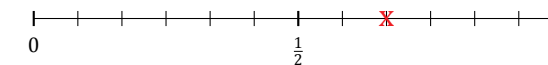
10. $\frac{5}{9} \approx \frac{1}{2}$



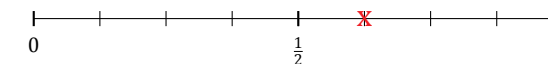
12. $\frac{2}{6} \approx \frac{1}{2}$



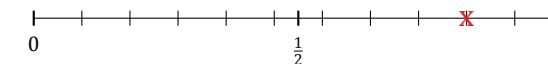
14. $\frac{8}{12} \approx \frac{1}{2}$



16. $\frac{5}{8} \approx \frac{1}{2}$



18. $\frac{9}{11} \approx 1$



20. $\frac{2}{9} \approx 0$

