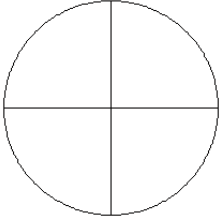


Modelos de Fracciones (A)

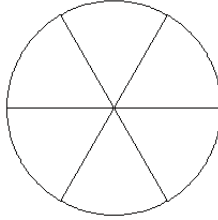
Coloree secciones de cada círculo para modelar cada fracción.

1.



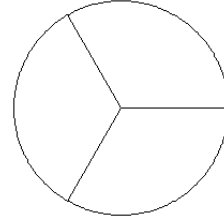
$$\frac{4}{4}$$

2.



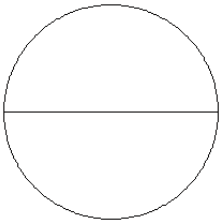
$$\frac{4}{6}$$

3.



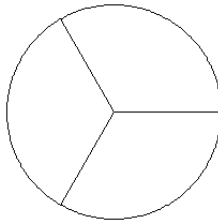
$$\frac{2}{3}$$

4.



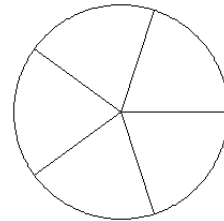
$$\frac{0}{2}$$

5.



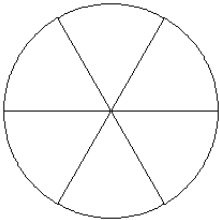
$$\frac{1}{3}$$

6.



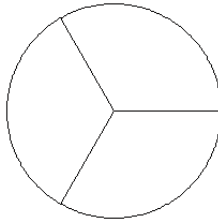
$$\frac{4}{5}$$

7.



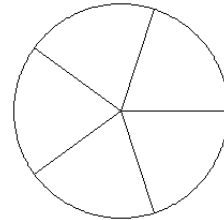
$$\frac{3}{6}$$

8.



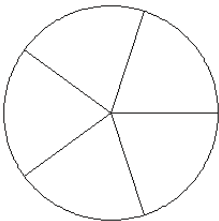
$$\frac{2}{3}$$

9.



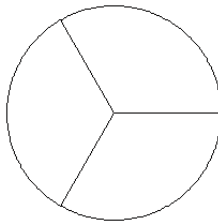
$$\frac{3}{5}$$

10.



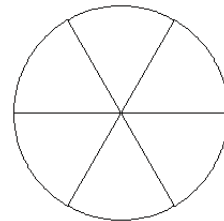
$$\frac{3}{5}$$

11.



$$\frac{0}{3}$$

12.

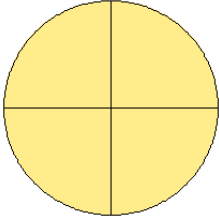


$$\frac{2}{6}$$

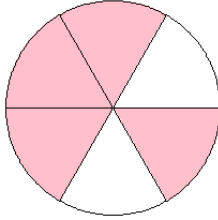
Modelos de Fracciones (A) Respuestas

Coloree secciones de cada círculo para modelar cada fracción.

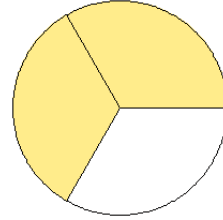
1.



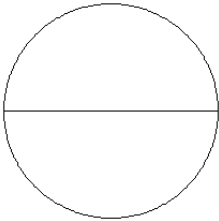
2.



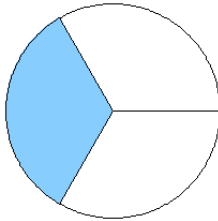
3.



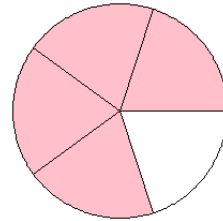
4.



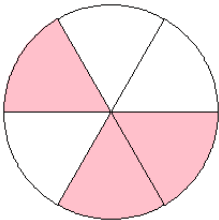
5.



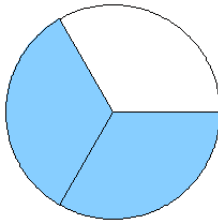
6.



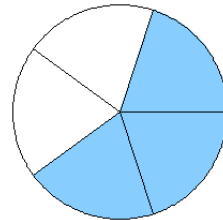
7.



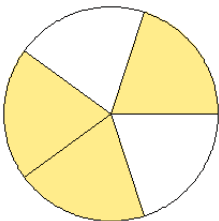
8.



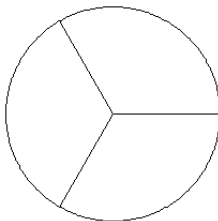
9.



10.



11.



12.

