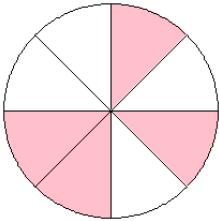


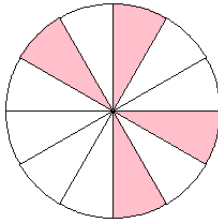
## Modelos de Fracciones (C)

¿Qué fracción se muestra en cada modelo?

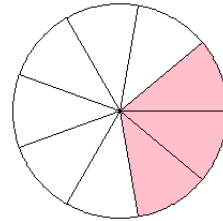
1.



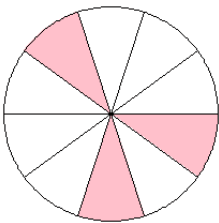
2.



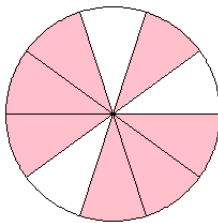
3.



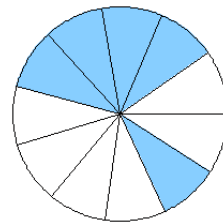
4.



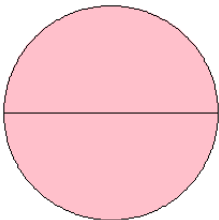
5.



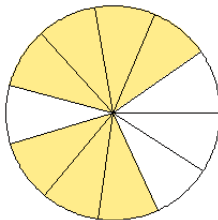
6.



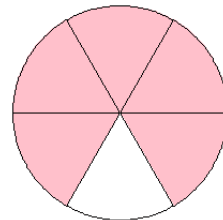
7.



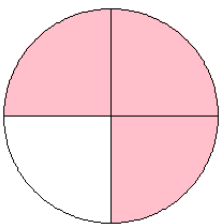
8.



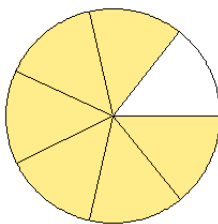
9.



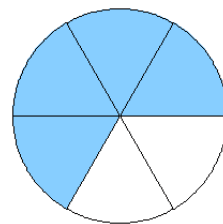
10.



11.



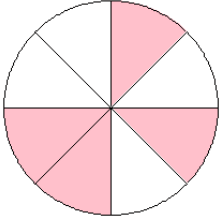
12.



# Modelos de Fracciones (C) Respuestas

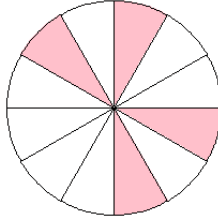
¿Qué fracción se muestra en cada modelo?

1.



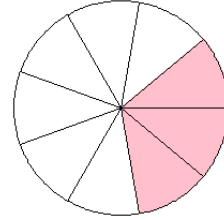
$$= \frac{4}{8}$$

2.



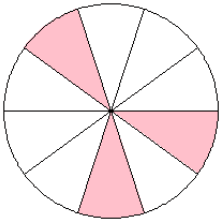
$$= \frac{4}{12}$$

3.



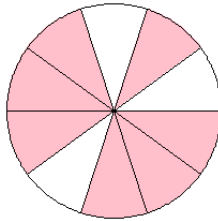
$$= \frac{3}{9}$$

4.



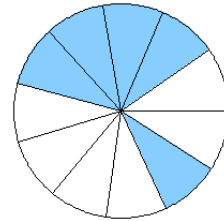
$$= \frac{3}{10}$$

5.



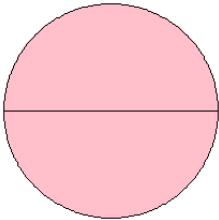
$$= \frac{7}{10}$$

6.



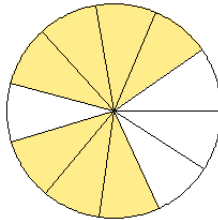
$$= \frac{5}{11}$$

7.



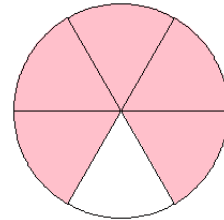
$$= \frac{2}{2}$$

8.



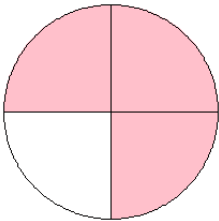
$$= \frac{7}{11}$$

9.



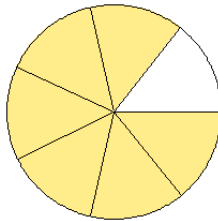
$$= \frac{5}{6}$$

10.



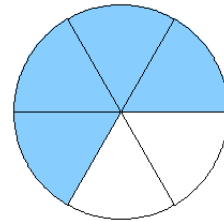
$$= \frac{3}{4}$$

11.



$$= \frac{6}{7}$$

12.



$$= \frac{4}{6}$$