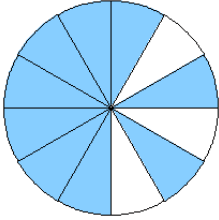


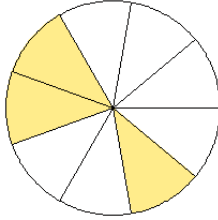
# Modelos de Fracciones (A)

¿Qué fracción se muestra en cada modelo?

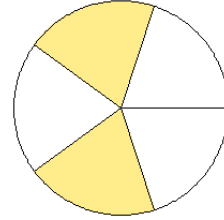
1.



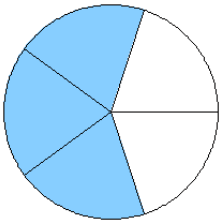
2.



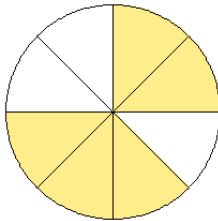
3.



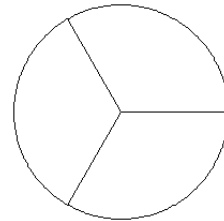
4.



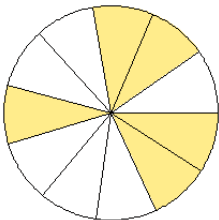
5.



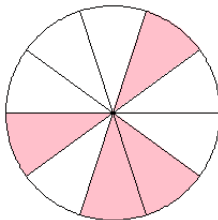
6.



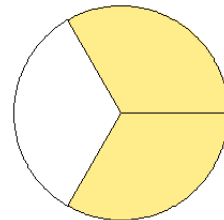
7.



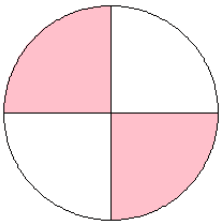
8.



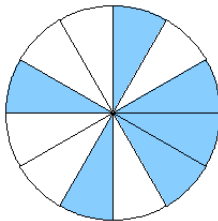
9.



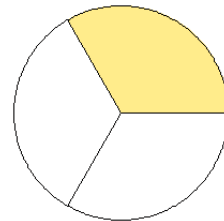
10.



11.



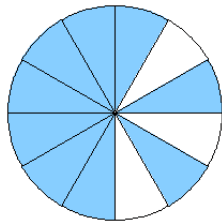
12.



# Modelos de Fracciones (A) Respuestas

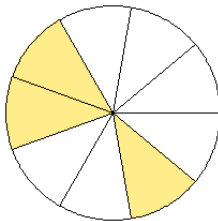
¿Qué fracción se muestra en cada modelo?

1.



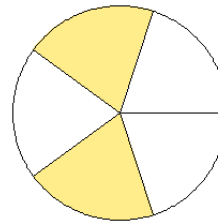
$$= \frac{9}{12}$$

2.



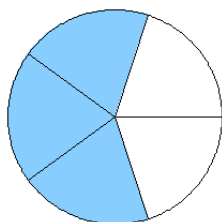
$$= \frac{3}{9}$$

3.



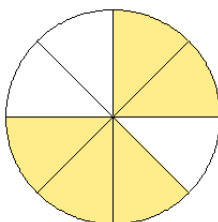
$$= \frac{2}{5}$$

4.



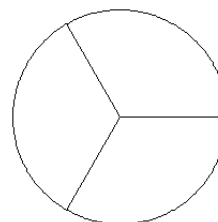
$$= \frac{3}{5}$$

5.



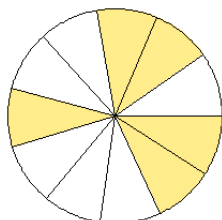
$$= \frac{5}{8}$$

6.



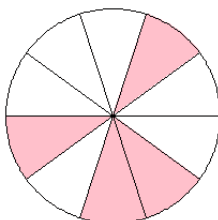
$$= \frac{0}{3}$$

7.



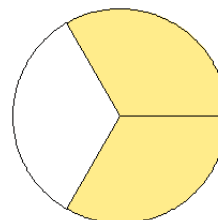
$$= \frac{5}{11}$$

8.



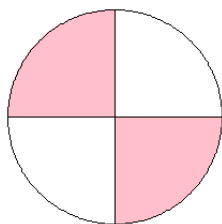
$$= \frac{4}{10}$$

9.



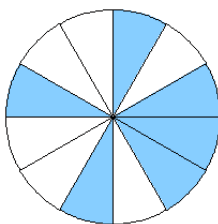
$$= \frac{2}{3}$$

10.



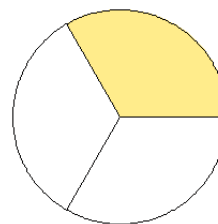
$$= \frac{2}{4}$$

11.



$$= \frac{6}{12}$$

12.



$$= \frac{1}{3}$$