

## Modelando Quintos (E)

Instrucciones: Modele las fracciones coloreando. Intente colorear fracciones similares de formas diferentes.

$$\frac{1}{5}$$

$$\frac{1}{5}$$

$$\frac{2}{5}$$

$$\frac{2}{5}$$

$$\frac{2}{5}$$

$$\frac{2}{5}$$


$$\frac{3}{5}$$

$$\frac{4}{5}$$


$$\frac{5}{5}$$

## Modelando Quintos (E) Respuestas


Instrucciones: Modele las fracciones coloreando. Intente colorear fracciones similares de formas diferentes.



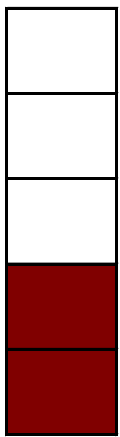
$$\frac{1}{5}$$




$$\frac{1}{5}$$




$$\frac{2}{5}$$




$$\frac{2}{5}$$




$$\frac{2}{5}$$




$$\frac{2}{5}$$



$$\frac{3}{5}$$



$$\frac{4}{5}$$



$$\frac{5}{5}$$