

Modelando Quintos (C)

Instrucciones: Modele las fracciones coloreando. Intente colorear fracciones similares de formas diferentes.

$$\frac{1}{5}$$

$$\frac{2}{5}$$

$$\frac{3}{5}$$

$$\frac{2}{5}$$

$$\frac{3}{5}$$

$$\frac{4}{5}$$


$$\frac{2}{5}$$

$$\frac{1}{5}$$


$$\frac{4}{5}$$

Modelando Quintos (C) Respuestas

Instrucciones: Modele las fracciones coloreando. Intente colorear fracciones similares de formas diferentes.



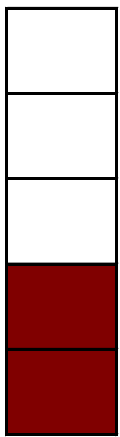
$$\frac{1}{5}$$




$$\frac{2}{5}$$



$$\frac{3}{5}$$




$$\frac{2}{5}$$




$$\frac{3}{5}$$




$$\frac{4}{5}$$



$$\frac{2}{5}$$



$$\frac{1}{5}$$



$$\frac{4}{5}$$