



Modelar Mitades y Tercios (A)




En este modelo
hay tres partes.
Una parte está
sombreada

$\frac{1}{3}$ parte sombreada
3 partes


Para cada modelo, escriba una fracción que lo describa.




—




—




—




—




—




—



—




—



—


Modelar Mitades y Tercios (A) Respuestas




En este modelo
hay tres partes.
Una parte está
sombreada

$\frac{1}{3}$ parte sombreada
 3 partes


Para cada modelo, escriba una fracción que lo describa.




$\frac{1}{3}$




$\frac{2}{3}$




$\frac{0}{3}$




$\frac{2}{3}$




$\frac{1}{3}$




$\frac{1}{2}$



$\frac{1}{2}$



$\frac{2}{3}$



$\frac{2}{2}$