


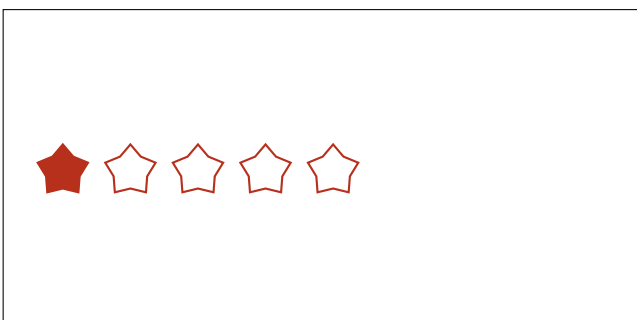
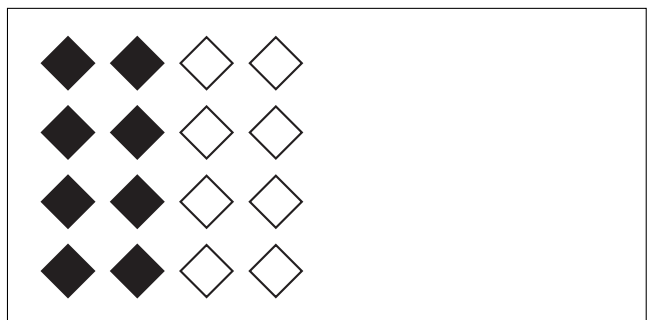
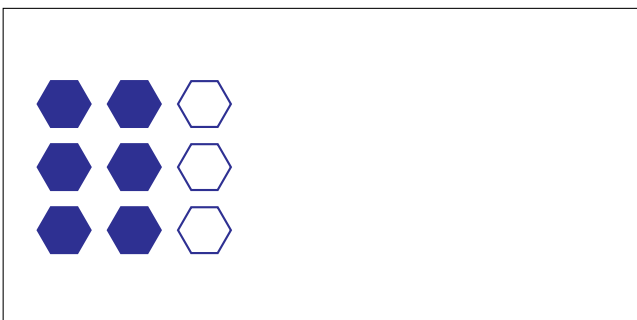
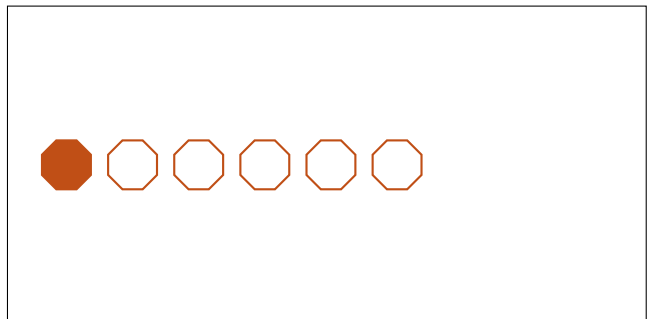

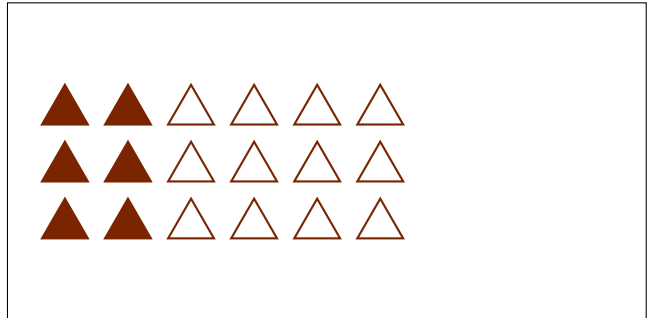
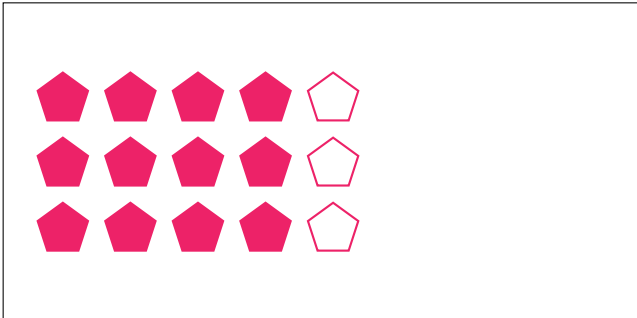
Partes de Un Grupo (B)




En este grupo
hay 24 formas y
18 están rellenas.

$$\frac{18 \text{ formas rellenas}}{24 \text{ formas en el grupo}} = \frac{18}{24} = \frac{3}{4}$$

Escriba una fracción para cada uno de los modelos siguientes.




Partes de Un Grupo (B) Respuestas




En este grupo
hay 24 formas y
18 están rellenas.

$$\frac{18 \text{ formas rellenas}}{24 \text{ formas en el grupo}} = \frac{18}{24} = \frac{3}{4}$$

Escriba una fracción para cada uno de los modelos siguientes.



$$\frac{12}{15} = \frac{4}{5}$$




$$\frac{6}{18} = \frac{1}{3}$$




$$\frac{6}{8} = \frac{3}{4}$$



$$\frac{1}{6}$$



$$\frac{6}{9} = \frac{2}{3}$$



$$\frac{8}{16} = \frac{1}{2}$$



$$\frac{1}{5}$$



$$\frac{5}{6}$$