

Práctica con Bolas de Nieve (A)

Nombre: _____

Fecha: _____

Lanza cada bola de nieve a la diana correcta.

$$\begin{array}{r} 112 \\ \div 7 \\ \hline \end{array}$$



$$\begin{array}{r} 480 \\ \div 5 \\ \hline \end{array}$$




$$\begin{array}{r} 522 \\ \div 6 \\ \hline \end{array}$$



$$\begin{array}{r} 90 \\ \div 3 \\ \hline \end{array}$$



$$\begin{array}{r} 440 \\ \div 8 \\ \hline \end{array}$$



$$\begin{array}{r} 102 \\ \div 2 \\ \hline \end{array}$$



$$\begin{array}{r} 208 \\ \div 8 \\ \hline \end{array}$$



$$\begin{array}{r} 176 \\ \div 8 \\ \hline \end{array}$$



$$\begin{array}{r} 184 \\ \div 2 \\ \hline \end{array}$$



$$\begin{array}{r} 36 \\ \div 3 \\ \hline \end{array}$$

Práctica con Bolas de Nieve (A) Respuestas

Nombre: _____

Fecha: _____

Lanza cada bola de nieve a la diana correcta.

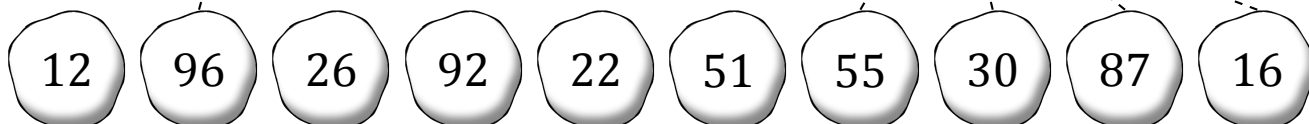
$$\begin{array}{r} 112 \\ \div 7 \\ \hline \end{array}$$

$$\begin{array}{r} 480 \\ \div 5 \\ \hline \end{array}$$

$$\begin{array}{r} 522 \\ \div 6 \\ \hline \end{array}$$

$$\begin{array}{r} 90 \\ \div 3 \\ \hline \end{array}$$

$$\begin{array}{r} 440 \\ \div 8 \\ \hline \end{array}$$



$$\begin{array}{r} 102 \\ \div 2 \\ \hline \end{array}$$

$$\begin{array}{r} 208 \\ \div 8 \\ \hline \end{array}$$

$$\begin{array}{r} 176 \\ \div 8 \\ \hline \end{array}$$

$$\begin{array}{r} 184 \\ \div 2 \\ \hline \end{array}$$

$$\begin{array}{r} 36 \\ \div 3 \\ \hline \end{array}$$

Práctica con Bolas de Nieve (B)

Nombre: _____

Fecha: _____

Lanza cada bola de nieve a la diana correcta.

$$\begin{array}{r} 294 \\ \div 3 \\ \hline \end{array}$$



$$\begin{array}{r} 112 \\ \div 4 \\ \hline \end{array}$$



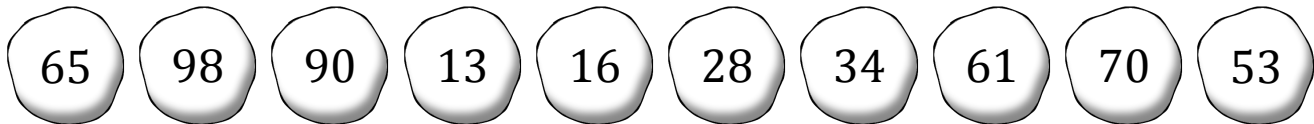
$$\begin{array}{r} 78 \\ \div 6 \\ \hline \end{array}$$



$$\begin{array}{r} 420 \\ \div 6 \\ \hline \end{array}$$



$$\begin{array}{r} 183 \\ \div 3 \\ \hline \end{array}$$



$$\begin{array}{r} 80 \\ \div 5 \\ \hline \end{array}$$



$$\begin{array}{r} 170 \\ \div 5 \\ \hline \end{array}$$



$$\begin{array}{r} 585 \\ \div 9 \\ \hline \end{array}$$



$$\begin{array}{r} 106 \\ \div 2 \\ \hline \end{array}$$



$$\begin{array}{r} 360 \\ \div 4 \\ \hline \end{array}$$

Práctica con Bolas de Nieve (B) Respuestas

Nombre: _____

Fecha: _____

Lanza cada bola de nieve a la diana correcta.

$$\begin{array}{r} 294 \\ \div 3 \\ \hline \end{array}$$

$$\begin{array}{r} 112 \\ \div 4 \\ \hline \end{array}$$

$$\begin{array}{r} 78 \\ \div 6 \\ \hline \end{array}$$

$$\begin{array}{r} 420 \\ \div 6 \\ \hline \end{array}$$

$$\begin{array}{r} 183 \\ \div 3 \\ \hline \end{array}$$



- 65 98 90 13 16 28 34 61 70 53



$$\begin{array}{r} 80 \\ \div 5 \\ \hline \end{array}$$

$$\begin{array}{r} 170 \\ \div 5 \\ \hline \end{array}$$

$$\begin{array}{r} 585 \\ \div 9 \\ \hline \end{array}$$

$$\begin{array}{r} 106 \\ \div 2 \\ \hline \end{array}$$

$$\begin{array}{r} 360 \\ \div 4 \\ \hline \end{array}$$

Práctica con Bolas de Nieve (C)

Nombre: _____

Fecha: _____

Lanza cada bola de nieve a la diana correcta.

$$\begin{array}{r} 456 \\ \div 8 \\ \hline \end{array}$$



$$\begin{array}{r} 462 \\ \div 7 \\ \hline \end{array}$$



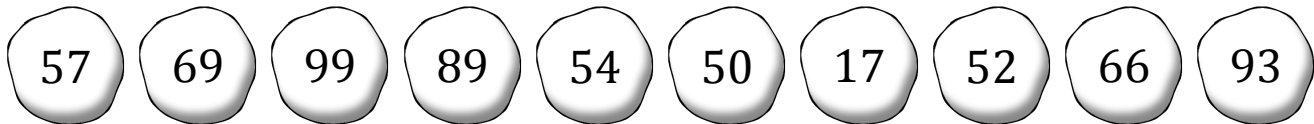
$$\begin{array}{r} 621 \\ \div 9 \\ \hline \end{array}$$



$$\begin{array}{r} 150 \\ \div 3 \\ \hline \end{array}$$



$$\begin{array}{r} 324 \\ \div 6 \\ \hline \end{array}$$



$$\begin{array}{r} 416 \\ \div 8 \\ \hline \end{array}$$



$$\begin{array}{r} 837 \\ \div 9 \\ \hline \end{array}$$



$$\begin{array}{r} 623 \\ \div 7 \\ \hline \end{array}$$



$$\begin{array}{r} 693 \\ \div 7 \\ \hline \end{array}$$



$$\begin{array}{r} 85 \\ \div 5 \\ \hline \end{array}$$

Práctica con Bolas de Nieve (C) Respuestas

Nombre: _____

Fecha: _____

Lanza cada bola de nieve a la diana correcta.

$$\begin{array}{r} 456 \\ \div 8 \\ \hline \end{array}$$



$$\begin{array}{r} 462 \\ \div 7 \\ \hline \end{array}$$



$$\begin{array}{r} 621 \\ \div 9 \\ \hline \end{array}$$



$$\begin{array}{r} 150 \\ \div 3 \\ \hline \end{array}$$



$$\begin{array}{r} 324 \\ \div 6 \\ \hline \end{array}$$



57

69

99

89

54

50

17

52

66

93

$$\begin{array}{r} 416 \\ \div 8 \\ \hline \end{array}$$



$$\begin{array}{r} 837 \\ \div 9 \\ \hline \end{array}$$



$$\begin{array}{r} 623 \\ \div 7 \\ \hline \end{array}$$



$$\begin{array}{r} 693 \\ \div 7 \\ \hline \end{array}$$



$$\begin{array}{r} 85 \\ \div 5 \\ \hline \end{array}$$



Práctica con Bolas de Nieve (D)

Nombre: _____

Fecha: _____

Lanza cada bola de nieve a la diana correcta.

$$\begin{array}{r} 158 \\ \div 2 \\ \hline \end{array}$$



$$\begin{array}{r} 366 \\ \div 6 \\ \hline \end{array}$$




$$\begin{array}{r} 609 \\ \div 7 \\ \hline \end{array}$$



$$\begin{array}{r} 370 \\ \div 5 \\ \hline \end{array}$$



$$\begin{array}{r} 246 \\ \div 6 \\ \hline \end{array}$$



$$\begin{array}{r} 350 \\ \div 7 \\ \hline \end{array}$$



$$\begin{array}{r} 110 \\ \div 5 \\ \hline \end{array}$$



$$\begin{array}{r} 116 \\ \div 2 \\ \hline \end{array}$$



$$\begin{array}{r} 455 \\ \div 5 \\ \hline \end{array}$$



$$\begin{array}{r} 280 \\ \div 5 \\ \hline \end{array}$$

Práctica con Bolas de Nieve (D) Respuestas

Nombre: _____

Fecha: _____

Lanza cada bola de nieve a la diana correcta.


$$\begin{array}{r} 158 \\ \div 2 \\ \hline \end{array}$$

$$\begin{array}{r} 366 \\ \div 6 \\ \hline \end{array}$$

$$\begin{array}{r} 609 \\ \div 7 \\ \hline \end{array}$$

$$\begin{array}{r} 370 \\ \div 5 \\ \hline \end{array}$$

$$\begin{array}{r} 246 \\ \div 6 \\ \hline \end{array}$$



$$\begin{array}{r} 350 \\ \div 7 \\ \hline \end{array}$$

$$\begin{array}{r} 110 \\ \div 5 \\ \hline \end{array}$$

$$\begin{array}{r} 116 \\ \div 2 \\ \hline \end{array}$$

$$\begin{array}{r} 455 \\ \div 5 \\ \hline \end{array}$$

$$\begin{array}{r} 280 \\ \div 5 \\ \hline \end{array}$$

Práctica con Bolas de Nieve (E)

Nombre: _____

Fecha: _____

Lanza cada bola de nieve a la diana correcta.

$$\begin{array}{r} 304 \\ \div 4 \\ \hline \end{array}$$



$$\begin{array}{r} 204 \\ \div 6 \\ \hline \end{array}$$



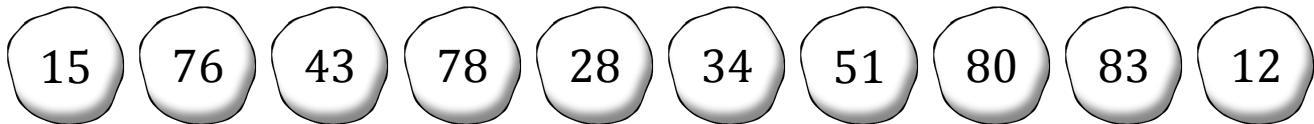
$$\begin{array}{r} 172 \\ \div 4 \\ \hline \end{array}$$



$$\begin{array}{r} 357 \\ \div 7 \\ \hline \end{array}$$



$$\begin{array}{r} 140 \\ \div 5 \\ \hline \end{array}$$



$$\begin{array}{r} 747 \\ \div 9 \\ \hline \end{array}$$



$$\begin{array}{r} 640 \\ \div 8 \\ \hline \end{array}$$



$$\begin{array}{r} 30 \\ \div 2 \\ \hline \end{array}$$



$$\begin{array}{r} 36 \\ \div 3 \\ \hline \end{array}$$



$$\begin{array}{r} 156 \\ \div 2 \\ \hline \end{array}$$

Práctica con Bolas de Nieve (E) Respuestas

Nombre: _____

Fecha: _____

Lanza cada bola de nieve a la diana correcta.

$$\begin{array}{r} 304 \\ \div 4 \\ \hline \end{array}$$



$$\begin{array}{r} 204 \\ \div 6 \\ \hline \end{array}$$



$$\begin{array}{r} 172 \\ \div 4 \\ \hline \end{array}$$



$$\begin{array}{r} 357 \\ \div 7 \\ \hline \end{array}$$



$$\begin{array}{r} 140 \\ \div 5 \\ \hline \end{array}$$



15

76

43

78

28

34

51

80

83

12

$$\begin{array}{r} 747 \\ \div 9 \\ \hline \end{array}$$



$$\begin{array}{r} 640 \\ \div 8 \\ \hline \end{array}$$



$$\begin{array}{r} 30 \\ \div 2 \\ \hline \end{array}$$



$$\begin{array}{r} 36 \\ \div 3 \\ \hline \end{array}$$



$$\begin{array}{r} 156 \\ \div 2 \\ \hline \end{array}$$



Práctica con Bolas de Nieve (F)

Nombre: _____

Fecha: _____

Lanza cada bola de nieve a la diana correcta.

$$\begin{array}{r} 84 \\ \div 6 \\ \hline \end{array}$$



$$\begin{array}{r} 224 \\ \div 8 \\ \hline \end{array}$$



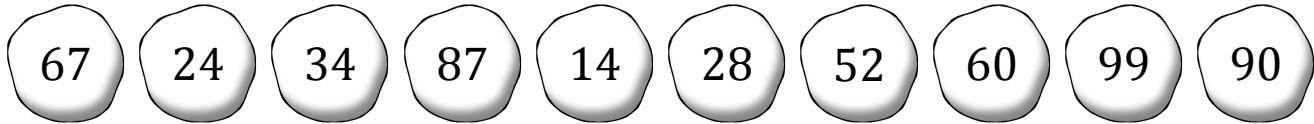
$$\begin{array}{r} 272 \\ \div 8 \\ \hline \end{array}$$



$$\begin{array}{r} 156 \\ \div 3 \\ \hline \end{array}$$



$$\begin{array}{r} 396 \\ \div 4 \\ \hline \end{array}$$



$$\begin{array}{r} 360 \\ \div 4 \\ \hline \end{array}$$



$$\begin{array}{r} 120 \\ \div 5 \\ \hline \end{array}$$



$$\begin{array}{r} 134 \\ \div 2 \\ \hline \end{array}$$



$$\begin{array}{r} 540 \\ \div 9 \\ \hline \end{array}$$



$$\begin{array}{r} 174 \\ \div 2 \\ \hline \end{array}$$

Práctica con Bolas de Nieve (F) Respuestas

Nombre: _____

Fecha: _____

Lanza cada bola de nieve a la diana correcta.

$$\begin{array}{r} 84 \\ \div 6 \\ \hline \end{array}$$



$$\begin{array}{r} 224 \\ \div 8 \\ \hline \end{array}$$



$$\begin{array}{r} 272 \\ \div 8 \\ \hline \end{array}$$



$$\begin{array}{r} 156 \\ \div 3 \\ \hline \end{array}$$



$$\begin{array}{r} 396 \\ \div 4 \\ \hline \end{array}$$



67

24

34

87

14

28

52

60

99

90

$$\begin{array}{r} 360 \\ \div 4 \\ \hline \end{array}$$



$$\begin{array}{r} 120 \\ \div 5 \\ \hline \end{array}$$



$$\begin{array}{r} 134 \\ \div 2 \\ \hline \end{array}$$



$$\begin{array}{r} 540 \\ \div 9 \\ \hline \end{array}$$



$$\begin{array}{r} 174 \\ \div 2 \\ \hline \end{array}$$



Práctica con Bolas de Nieve (G)

Nombre: _____

Fecha: _____

Lanza cada bola de nieve a la diana correcta.

$$\begin{array}{r} 267 \\ \div 3 \\ \hline \end{array}$$



$$\begin{array}{r} 108 \\ \div 2 \\ \hline \end{array}$$



$$\begin{array}{r} 378 \\ \div 9 \\ \hline \end{array}$$



$$\begin{array}{r} 68 \\ \div 4 \\ \hline \end{array}$$



$$\begin{array}{r} 405 \\ \div 9 \\ \hline \end{array}$$



42

34

45

89

92

41

51

17

54

96



$$\begin{array}{r} 204 \\ \div 4 \\ \hline \end{array}$$



$$\begin{array}{r} 192 \\ \div 2 \\ \hline \end{array}$$



$$\begin{array}{r} 205 \\ \div 5 \\ \hline \end{array}$$



$$\begin{array}{r} 136 \\ \div 4 \\ \hline \end{array}$$



$$\begin{array}{r} 828 \\ \div 9 \\ \hline \end{array}$$

Práctica con Bolas de Nieve (G) Respuestas

Nombre: _____

Fecha: _____

Lanza cada bola de nieve a la diana correcta.

$$\begin{array}{r} 267 \\ \div 3 \\ \hline \end{array}$$

$$\begin{array}{r} 108 \\ \div 2 \\ \hline \end{array}$$

$$\begin{array}{r} 378 \\ \div 9 \\ \hline \end{array}$$

$$\begin{array}{r} 68 \\ \div 4 \\ \hline \end{array}$$

$$\begin{array}{r} 405 \\ \div 9 \\ \hline \end{array}$$



42

34

45

89

92

41

51

17

54

96



$$\begin{array}{r} 204 \\ \div 4 \\ \hline \end{array}$$

$$\begin{array}{r} 192 \\ \div 2 \\ \hline \end{array}$$

$$\begin{array}{r} 205 \\ \div 5 \\ \hline \end{array}$$

$$\begin{array}{r} 136 \\ \div 4 \\ \hline \end{array}$$

$$\begin{array}{r} 828 \\ \div 9 \\ \hline \end{array}$$

Práctica con Bolas de Nieve (H)

Nombre: _____

Fecha: _____

Lanza cada bola de nieve a la diana correcta.

$$\begin{array}{r} 352 \\ \div 8 \\ \hline \end{array}$$



$$\begin{array}{r} 752 \\ \div 8 \\ \hline \end{array}$$



$$\begin{array}{r} 205 \\ \div 5 \\ \hline \end{array}$$



$$\begin{array}{r} 75 \\ \div 5 \\ \hline \end{array}$$



$$\begin{array}{r} 336 \\ \div 4 \\ \hline \end{array}$$



94

15

44

57

41

17

98

95

62

84



$$\begin{array}{r} 456 \\ \div 8 \\ \hline \end{array}$$



$$\begin{array}{r} 475 \\ \div 5 \\ \hline \end{array}$$



$$\begin{array}{r} 34 \\ \div 2 \\ \hline \end{array}$$



$$\begin{array}{r} 882 \\ \div 9 \\ \hline \end{array}$$



$$\begin{array}{r} 248 \\ \div 4 \\ \hline \end{array}$$

Práctica con Bolas de Nieve (H) Respuestas

Nombre: _____

Fecha: _____

Lanza cada bola de nieve a la diana correcta.

$$\begin{array}{r} 352 \\ \div 8 \\ \hline \end{array}$$

$$\begin{array}{r} 752 \\ \div 8 \\ \hline \end{array}$$

$$\begin{array}{r} 205 \\ \div 5 \\ \hline \end{array}$$

$$\begin{array}{r} 75 \\ \div 5 \\ \hline \end{array}$$

$$\begin{array}{r} 336 \\ \div 4 \\ \hline \end{array}$$



94

15

44

57

41

17

98

95

62

84



$$\begin{array}{r} 456 \\ \div 8 \\ \hline \end{array}$$

$$\begin{array}{r} 475 \\ \div 5 \\ \hline \end{array}$$

$$\begin{array}{r} 34 \\ \div 2 \\ \hline \end{array}$$

$$\begin{array}{r} 882 \\ \div 9 \\ \hline \end{array}$$

$$\begin{array}{r} 248 \\ \div 4 \\ \hline \end{array}$$

Práctica con Bolas de Nieve (I)

Nombre: _____

Fecha: _____

Lanza cada bola de nieve a la diana correcta.

$$\begin{array}{r} 148 \\ \div 2 \\ \hline \end{array}$$



$$\begin{array}{r} 66 \\ \div 3 \\ \hline \end{array}$$



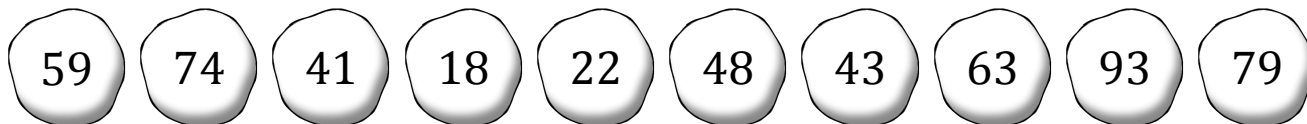
$$\begin{array}{r} 301 \\ \div 7 \\ \hline \end{array}$$



$$\begin{array}{r} 558 \\ \div 6 \\ \hline \end{array}$$



$$\begin{array}{r} 413 \\ \div 7 \\ \hline \end{array}$$



$$\begin{array}{r} 205 \\ \div 5 \\ \hline \end{array}$$



$$\begin{array}{r} 711 \\ \div 9 \\ \hline \end{array}$$



$$\begin{array}{r} 441 \\ \div 7 \\ \hline \end{array}$$



$$\begin{array}{r} 90 \\ \div 5 \\ \hline \end{array}$$



$$\begin{array}{r} 144 \\ \div 3 \\ \hline \end{array}$$

Práctica con Bolas de Nieve (I) Respuestas

Nombre: _____

Fecha: _____

Lanza cada bola de nieve a la diana correcta.

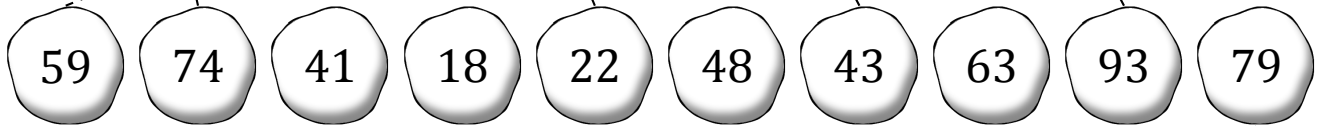
$$\begin{array}{r} 148 \\ \div 2 \\ \hline \end{array}$$

$$\begin{array}{r} 66 \\ \div 3 \\ \hline \end{array}$$

$$\begin{array}{r} 301 \\ \div 7 \\ \hline \end{array}$$

$$\begin{array}{r} 558 \\ \div 6 \\ \hline \end{array}$$

$$\begin{array}{r} 413 \\ \div 7 \\ \hline \end{array}$$



$$\begin{array}{r} 205 \\ \div 5 \\ \hline \end{array}$$

$$\begin{array}{r} 711 \\ \div 9 \\ \hline \end{array}$$

$$\begin{array}{r} 441 \\ \div 7 \\ \hline \end{array}$$

$$\begin{array}{r} 90 \\ \div 5 \\ \hline \end{array}$$

$$\begin{array}{r} 144 \\ \div 3 \\ \hline \end{array}$$

Práctica con Bolas de Nieve (J)

Nombre: _____

Fecha: _____

Lanza cada bola de nieve a la diana correcta.

$$\begin{array}{r} 148 \\ \div 4 \\ \hline \end{array}$$



$$\begin{array}{r} 96 \\ \div 4 \\ \hline \end{array}$$



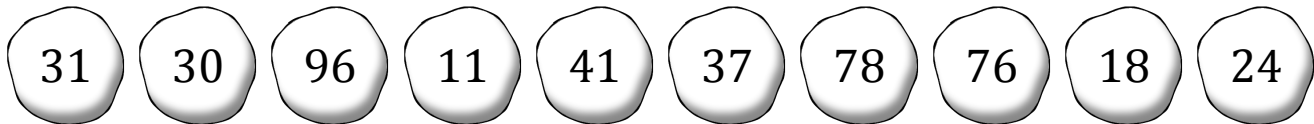
$$\begin{array}{r} 456 \\ \div 6 \\ \hline \end{array}$$



$$\begin{array}{r} 234 \\ \div 3 \\ \hline \end{array}$$



$$\begin{array}{r} 768 \\ \div 8 \\ \hline \end{array}$$



$$\begin{array}{r} 246 \\ \div 6 \\ \hline \end{array}$$



$$\begin{array}{r} 108 \\ \div 6 \\ \hline \end{array}$$



$$\begin{array}{r} 62 \\ \div 2 \\ \hline \end{array}$$



$$\begin{array}{r} 210 \\ \div 7 \\ \hline \end{array}$$



$$\begin{array}{r} 44 \\ \div 4 \\ \hline \end{array}$$

Práctica con Bolas de Nieve (J) Respuestas

Nombre: _____

Fecha: _____

Lanza cada bola de nieve a la diana correcta.

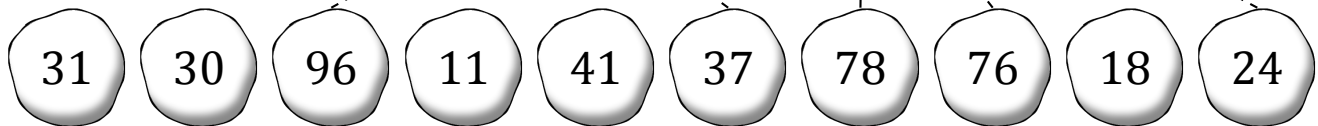
$$\begin{array}{r} 148 \\ \div 4 \\ \hline \end{array}$$

$$\begin{array}{r} 96 \\ \div 4 \\ \hline \end{array}$$

$$\begin{array}{r} 456 \\ \div 6 \\ \hline \end{array}$$

$$\begin{array}{r} 234 \\ \div 3 \\ \hline \end{array}$$

$$\begin{array}{r} 768 \\ \div 8 \\ \hline \end{array}$$



$$\begin{array}{r} 246 \\ \div 6 \\ \hline \end{array}$$

$$\begin{array}{r} 108 \\ \div 6 \\ \hline \end{array}$$

$$\begin{array}{r} 62 \\ \div 2 \\ \hline \end{array}$$

$$\begin{array}{r} 210 \\ \div 7 \\ \hline \end{array}$$

$$\begin{array}{r} 44 \\ \div 4 \\ \hline \end{array}$$