

# Representar Números (C)

¿Qué número se muestra en cada grupo de bloques base diez?



100



10



1

# Representar Números (C) Respuestas

¿Qué número se muestra en cada grupo de bloques base diez?



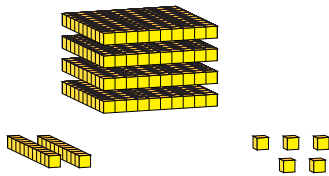
100



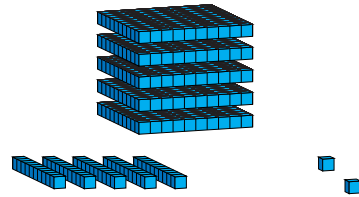
10



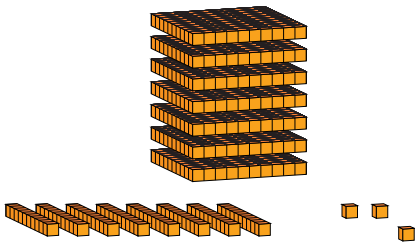
1



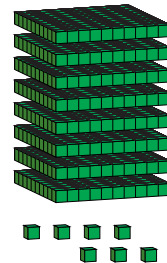
425



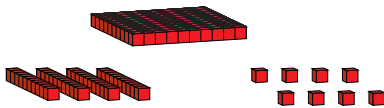
552




783



807



148



916