


# Representar Números (A)

¿Qué número se muestra en cada grupo de bloques base diez?



100




10



1

# Representar Números (A) Respuestas

¿Qué número se muestra en cada grupo de bloques base diez?



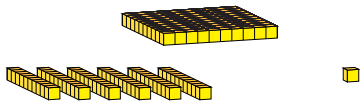
100



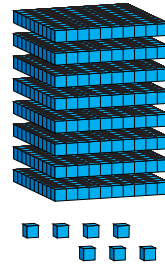
10




1



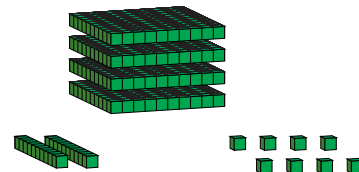
161



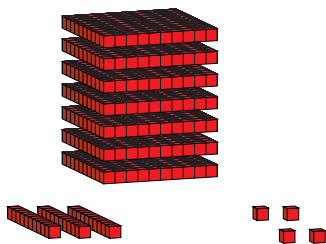
807



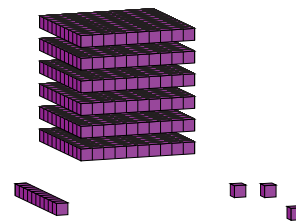
250



428



734



613