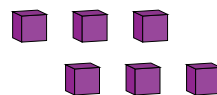
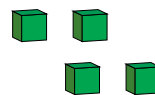
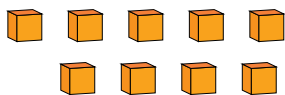
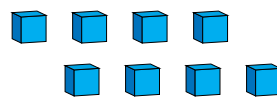
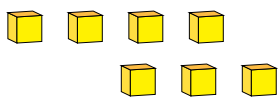


Representar Números (J)

¿Qué número se muestra en cada grupo de bloques base diez?



1

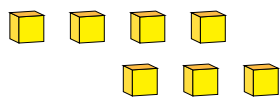


Representar Números (J) Respuestas

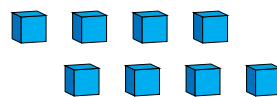
¿Qué número se muestra en cada grupo de bloques base diez?



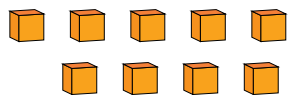
1



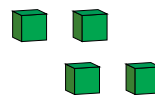
7



8



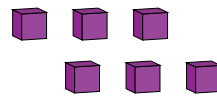
9



4



1



6