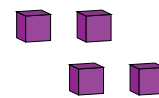
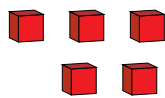
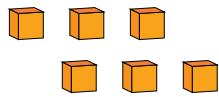
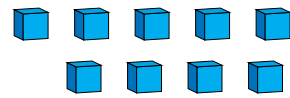
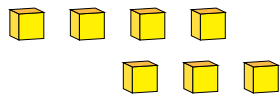


Representar Números (F)

¿Qué número se muestra en cada grupo de bloques base diez?



1

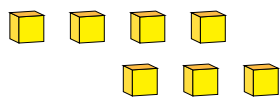


Representar Números (F) Respuestas

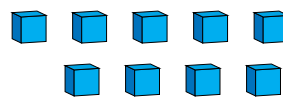
¿Qué número se muestra en cada grupo de bloques base diez?



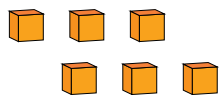
1



7



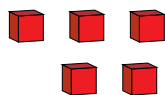
9



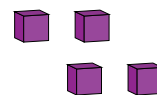
6



2



5



4