



# Representar Números (H)

¿Qué número se muestra en cada grupo de bloques base diez?



1000



100




10




1

# Representar Números (H) Respuestas

¿Qué número se muestra en cada grupo de bloques base diez?



1000



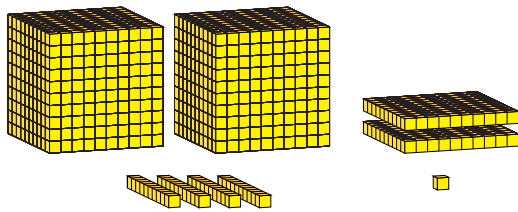
100



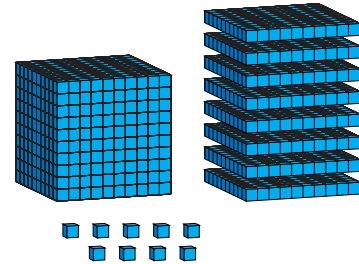
10




1



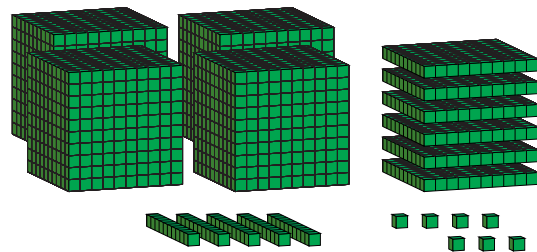
2241



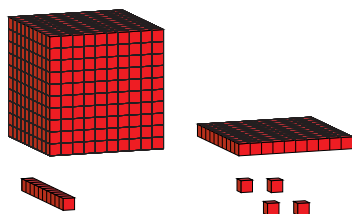
1809




3478



4657



1114



2386