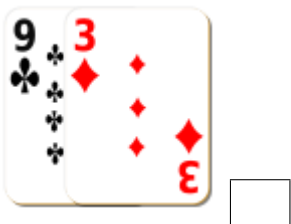
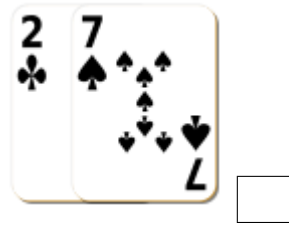
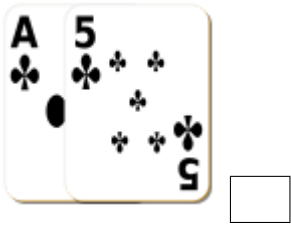
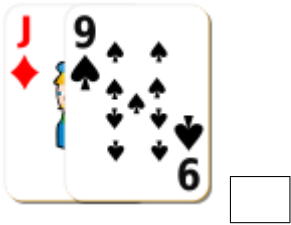




Sumar Cartas de Baraja (A)

Halle la suma de cada conjunto de cartas.



Sumar Cartas de Baraja (A) Answers

Halle la suma de cada conjunto de cartas.



16



14



20



17



6



9



19



17



4



15



12



10